

Q1. Birds and fishes lay eggs. What does it implies?

- a.They can grow bigger
- b.They can move
- c.They can reproduce
- d.They can respond to changes

Q2. The plant given in the picture is a _____



- a. Herbs
- b. Sherb
- c. Climber
- d. Tree

Q3. Which of the following can grow?



a.



b.



c.



d.

Q4. Which part of the day it is when the sun is just right above the head?

- a. Morning
- b. Evening
- c. Night
- d. Noon

Q5. Which of these occasions are celebrated in schools?

- a. Teacher's Day
- b. Sport's Day
- c. Children's Day
- d. All

Q6. Clothes protect us from different weathers, what protects us from the cold in winter

- a. Raincoat
- b. Cotton clothes
- c. Woolen clothes
- d. Umbrella

Q7. Which of the following is a living thing?



a.



b.

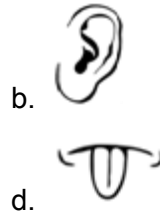
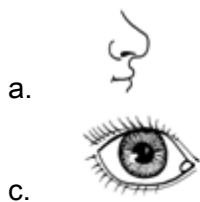


c.



d.

Q8. Which of the following sense organ give us the taste of food?



Q9. What makes the sailboat shown in picture to move in water?

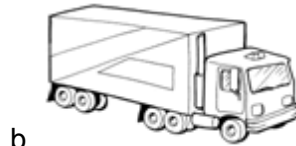


- a. Air b. Sun c. Water d. Moon

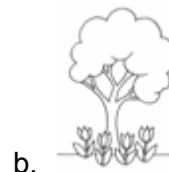
Q10. While ironing clothes that are slightly wet, we can see steam rising up when the hot iron touches the clothes, this is because

- a. Water is getting evaporated and forming steam
b. Water is condensing and forming steam
c. Water is used to wash clothes
d. The sun is coming in contact with the hot iron and giving rise to steam

Q11. Which of the following mode of transport have less number of wheels?



Q12. Which one of the following has the characteristic to move from one place to another on its own ?



Q13. Which one of the following is necessary for the growth of a plant?

- a. Water b. Injection c. Medicine d. None

Q14. You go out on vacation, no one waters your plants, and you will find that

- a. The plant is green and has grown
b. Flowers have bloomed on the plants
c. The plant is dying
d. None of the above

Q15. Which one of the following is called the king of fruits?

