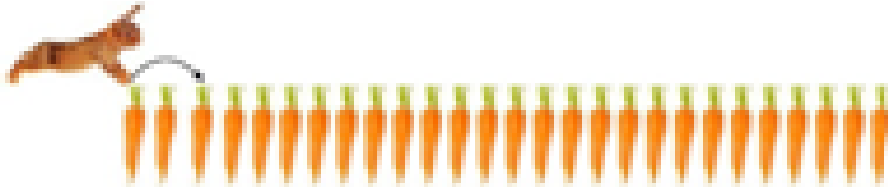



GSO SAMPLE PAPER CLASS 2

Q1. If a rabbit jumps and gets every 3rd carrot, then the number of jumps rabbit will make to reach the last.







- a. 8
- b. 9
- c. 10
- d. 27

Q2. Nail P is _cm longer than Nail Q.



- a. 9
- b. 1
- c. 2
- d. 3


Q3. Which of the following clocks shows 15 minutes past 6 O' clock?

- a. 
- b. 
- c. 
- d. 


Q4. Seema is daughter-in-law of Amit. Sunil is the brother of Seema's husband. How is Amit related to Sunil?

- a. Sunil is Amit's son.
- b. Sunil is Amit's nephew.
- c. Sunil is Amit's cousin brother.
- d. Sunil is Amit's uncle.

Q5. Which of the following animals provides us leather?

- a. 
- b. 
- c. 
- d. 

Q10. Observe the given picture. What would X be?

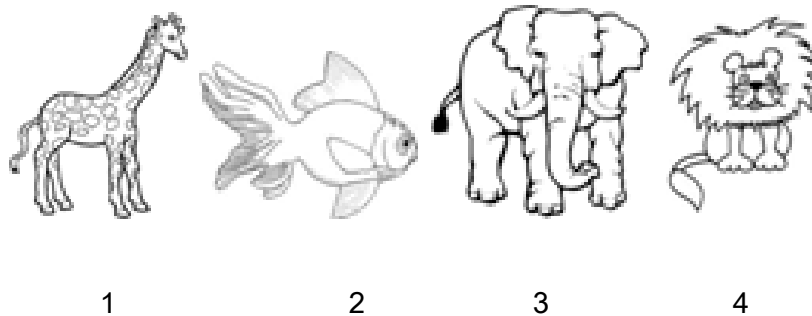


- a. Sweet potato
- b. Sugarcane
- c. Groundnut
- d. Aloe vera

Q11. Which of the following sentences is CORRECT?

- a. Wheat and rice are pulses.
- b. Pea and gram are pulses.
- c. Pea and tomato are cereals.
- d. Mango has many seeds.

Q12. Which animals are the tallest and largest animals in the world respectively?



- a. 2 and 3
- b. 2 and 4
- c. 1 and 2
- d. 3 and 4

Q13. Which option when unscrambled will give the names of the houses of Bee and Cattle?


	Bee	Cattle
A)	OHLE	ARBN
B)	IVEH	DESH
C)	SEHD	OEHL
D)	NED	ARBN

- a. A)
- b. B)
- c. C)
- d. D)

Q14. Select the odd one out.



Q15. Which of the following is NOT a fruit?



1

2

3

4

a. 1

b. 2

c. 3

d. 4