


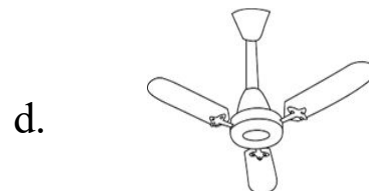




# SECTION - A

1. There is a certain relationship between the pair of figures given on either side of ( $:$ ). Identify the relationship of given pair and find the matching term.



2. Find out the odd one out from the given options.



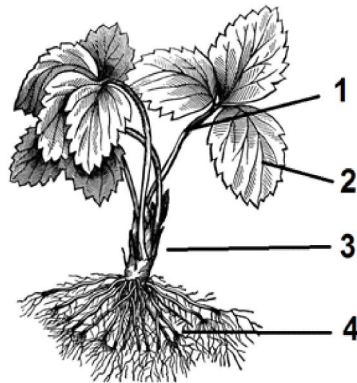




9. When Leela does mistake in doin sums, her mother always says, 'Think Leela, think'. Which organ of Leela's body her mother ask her to use?

- a. Brain
- b. Heart
- c. Stomach
- d. None of these

10. Which of the following represents the root of a plant ?



- a. 4
- b. 2
- c. 3
- d. 1

11. Match the following :

- |            |              |
|------------|--------------|
| A. Bird    | i. Butterfly |
| B. Insect  | ii. Lizard   |
| C. Reptile | iii. Peacock |

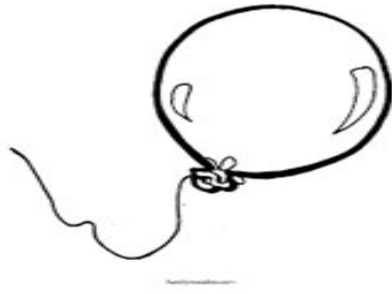
- a. A - (iii), B - (i), C - (ii)
- b. A - (i), B - (ii), C - (iii)
- c. A - (ii), B - (i), C - (iii)
- d. A - (iii), B - (ii), C - (i)

12. Which of the following statements is true ?

- a. Only animals can live inside water and plants cannot
- b. Not all available water is fit for drinking
- c. Water is blue in colour
- d. All of the above

Balloon

13.



and



are filled

with \_\_\_\_\_?

a. Water

b. Sand

c. Fire


d. Air

14. 4. Select in Incorrect match.

a. Neem leaves



b. Banana leaf



c. Mango leaves



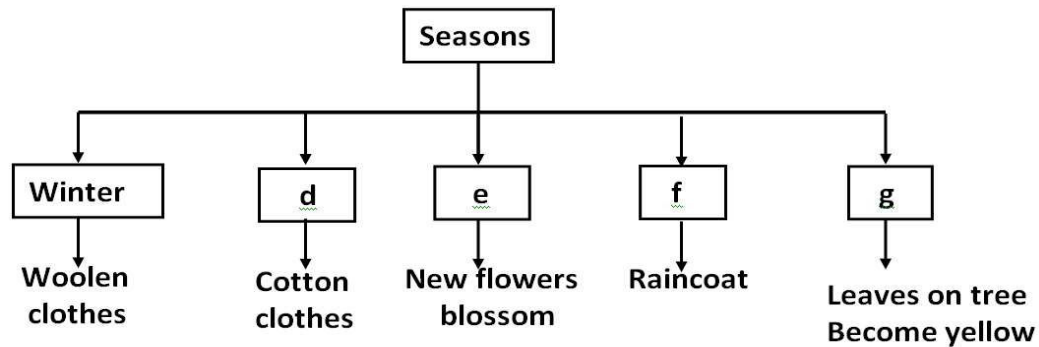
d. Pine leaf





- |    |                                 |                                    |
|----|---------------------------------|------------------------------------|
| b. | Clean your ears with earbuds    | Put finger in your nose            |
| c. | Cover your mouth while coughing | comb your hair daily               |
| d. | Cut nails with nail cutter      | Rise mouth with water after eating |

19. Study the given flowchart and identify seasons d, e, f and g.



- |    |                     |            |           |
|----|---------------------|------------|-----------|
| a. | d-Summer, e-Rainy,  | f-Monsoon, | g-Autumn  |
| b. | d-Spring, e-Monsoon | f-Rainy,   | g-Summer  |
| c. | d-Summer, e-Spring, | f-Monsoon, | g-Autumn  |
| d. | d-Summer, e-Autmn,  | f-Rainy,   | g-Monsoon |

20. All living things need \_\_\_\_\_ to stay alive.

- |                  |                      |
|------------------|----------------------|
| 1. Air           | b. Sunlight          |
| 3. Food          | d. Water             |
| a. 1, 3 and 4    | b. 1 and 2 only      |
| c. 1, 2 and only | d. All 1, 2, 3 and 4 |

21. Match the body part in Column - I that rhymes with the word in column-II and select the correct option.

- | Column-I | Column-II |
|----------|-----------|
| A. Chin  | 1. Band   |
| B. Hand  | 2. Thin   |
| C. Neck  | 3. Close  |
| D. Nose  | 4. Check  |

- a. A-3, B-4, C-2, D-1
- b. A-1, B-2, C-3, D-4
- c. A-2, B-1, C-4, D-3
- d. A-1, B-3, C-2, D-4

22. Match the column and select the correct option.

<b>Column - I</b>		<b>Column - II</b>	
A.	Cotton	1.	Sugar
B.	Jute Plant	2.	Bags
C.	Sugarcane	3.	Clothes
a.	A-3, B-2, C-1	b.	A-3, B-1, C-2
c.	A-1, B-2, C-3	d.	A-1, B-3, C-2