

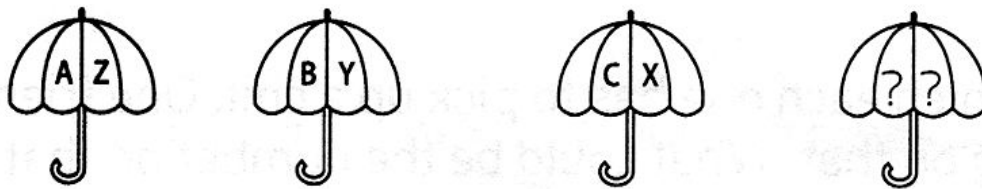
SECTION - A

1. Complete the given set of words following the same pattern as followed by first two words.

Pear is to Fruit as Spinach is to

- | | |
|----------|--------------|
| a. Grain | b. Salad |
| c. Root | d. Vegetable |

2. The last umbrella will consists of the letters.



- | | |
|-------|-------|
| a. DW | b. DE |
| c. XD | d. WD |

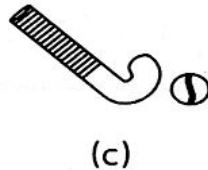
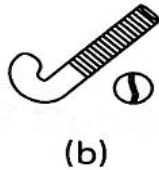
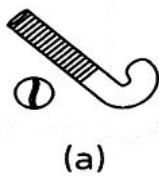
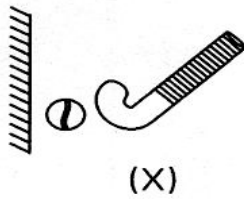
3. If 'hand' is called 'finger', 'finger' is called 'nose', 'nose' is called 'tongue' and 'tongue' is called 'foot', then with which organ does a man taste food ?

- | | |
|---------|-----------|
| a. Nose | b. Finger |
| c. Hand | d. Foot |

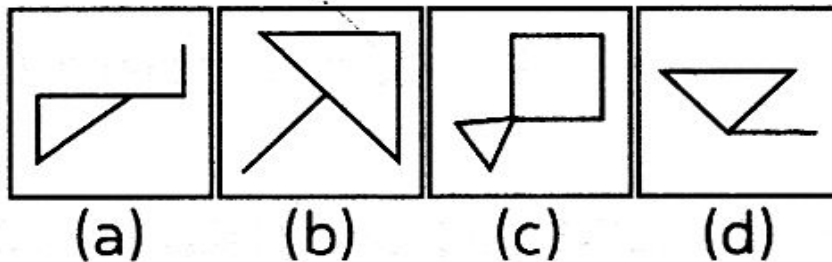
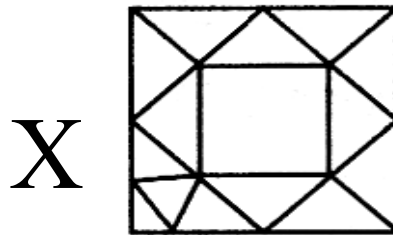
4. Lina comes out from her house and goes towards East direction, then turns left. She walks some distance and then turns towards her right. In which direction, is she facing now ?

- | | |
|----------|---------|
| a. South | b. East |
| c. North | d. West |

5. Find the mirror image of the hockey stick and ball when the hockey stick and ball are kept on the right side of the mirror.



6. Identify the figure which is exactly embedded in the given figure (X)?



7. A policeman goes straight towards North from the police station to catch the thief, he turns to his left, then turns left again and then turns to his right. Now, in which direction is he facing ?

- a. South b. North
 c. West d. East

SECTION - B

8. What do you understand by BIOS ?
- Basic input output system
 - Basic instruction omitted by the system
 - Basic interpreter output system
 - All of these
 - None of these
9. Which one of the following memories is programmed at the time of its manufacturing?
- ROM
 - RAM
 - DRAM
 - All of these
10. Identify the compact disk from the pictures given in the options below.

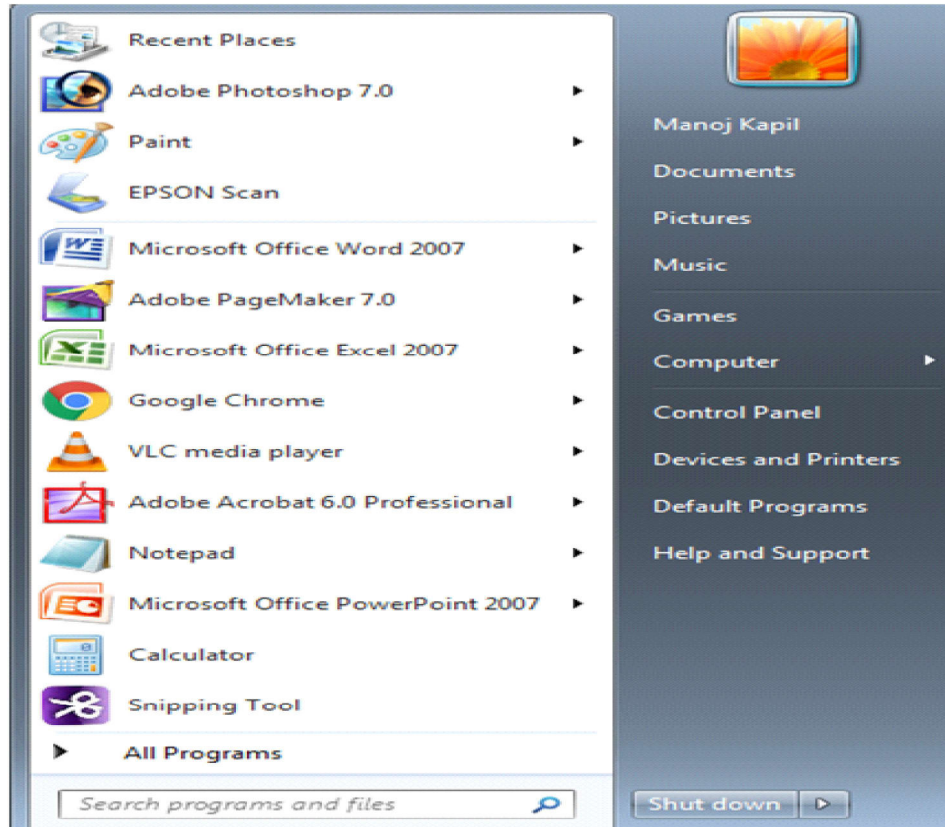


d. All of these

11. Which one of the following is the system software?
- MS-Excel
 - MS-Word
 - Windows O/S
 - All of these

12. What is the extension of MS- Word document ?
- a. *.png
 - b. *.docx
 - c. x.pdf
 - d. All of these

13. The image displayed here is the image of the _____.

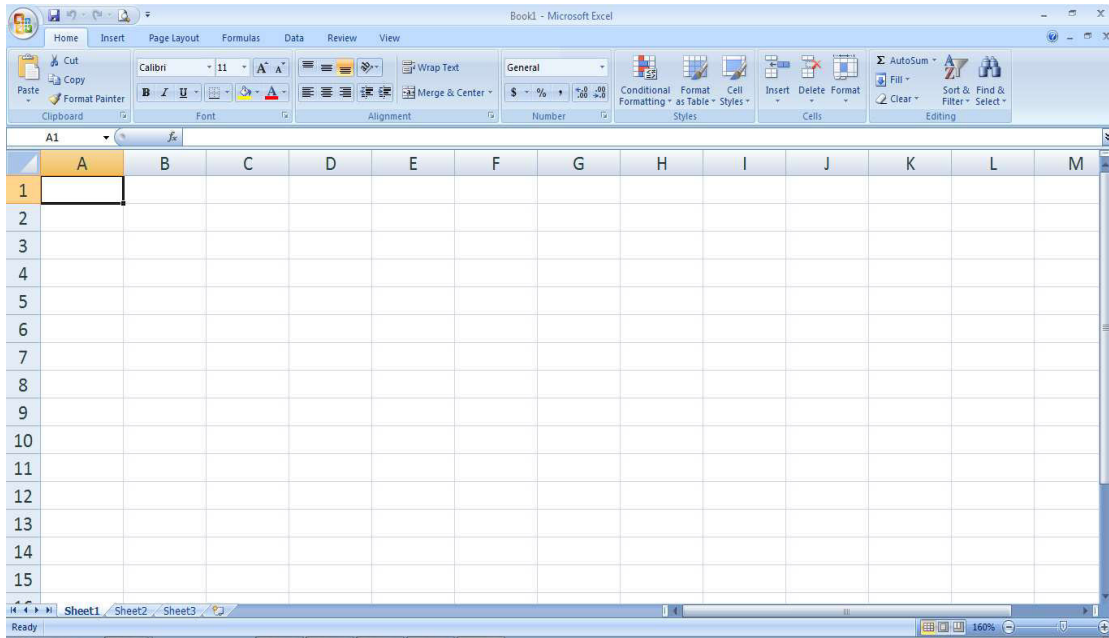


- a. Start menu
- b. Control Panel
- c. Windows Explorer
- d. Desktop

14. Which one of the following is used to set the word in centre on the paper?



15. Look at the following picture of a worksheet:


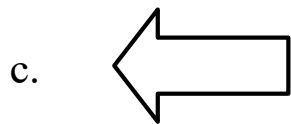


What is the address of the cell marked by letter X?

- a. CD12
- b. DD12
- c. D12
- d. D10

SECTION - C

16. A previous visited page of a website can be visited again by clicking of which one of the following icons?



17. Computer used many language processors. Which language processor converts the program written in assembly language into machine language.

- a. Compiler
- b. Interpreter
- c. Converter
- d. Assembler

18. In magnetic tape, information is accessed by stepping through each memory location. Which access mode does magnetic tape use?
- a. Random access
 - b. Direct access
 - c. Sequential access
 - d. Dynamic access.

19. Anil and Amit are discussing on the topic 'Computer Language'. Select whose statement is correct.

Anil: Computer understands only one language ie. binary language.

Amit: No, Computer can understand any language because it answers every question that i asked.

- a. Amit is correct
 - b. Anil is correct
 - c. Both are correct
 - d. Both are incorrect
20. Which one of the following is magnifier tool?



- a. (iv)
- b. (iii)
- c. (ii)
- d. (i)

21. You can group non contiguous worksheets with:
- The ctrl key and mouse
 - The group button on the standard toolbar
 - The alt + enter key
 - The shift key and the mouse.
22. These computers will have the capability of thinking on their own like a man with the help of Artificial Intelligence(AI). The 21st century will see better, faster, smaller and smarter computers. The above statement is correct about:
- Fourth generation computers
 - Third generation computers
 - Fifth generation computers
 - Second generation computers