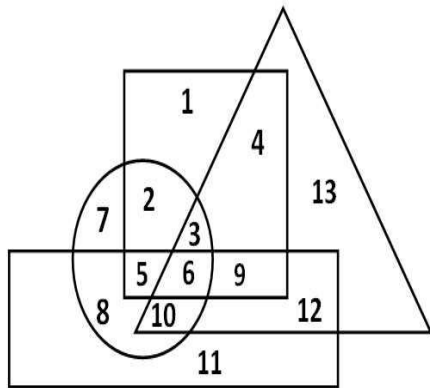




Sunita's house Calculate the shortest distance between her house and Sunita's house and in which direction Chirtra's house lie with respect to Sunita's house?

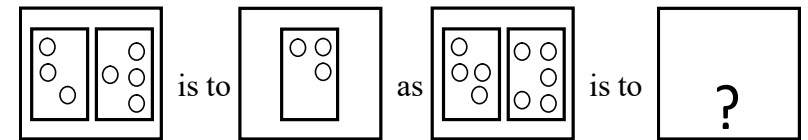
- a. 13 km south - east
- b. 13 km north-west
- c. 17 km north - west
- d. 17 km south-east

4. In the following venn diagram, the square represents women, the triangle represents persons who are in government services, the circle represents educated persons and the rectangle represents persons working in private sector. If each section of the diagram is numbered, then which number represents the uneducated women, who have government service as well as a jobs in private sector?



- a. 4
- b. 6
- c. 9
- d. 12

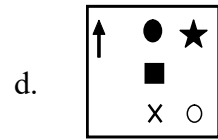
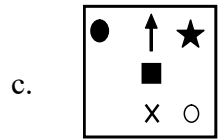
5. In the following questions, which shape completes the pattern of the second pair in the same way as the first pair ?



- a.
- b.
- c.
- d.

6. What comes next in the series given below.

- 1.
- 2.
- 3.
- 4.
- 5.
- a.
- b.



7. Choose the answer figure which have the same common region represented by the dot as given in the question figure (x).

