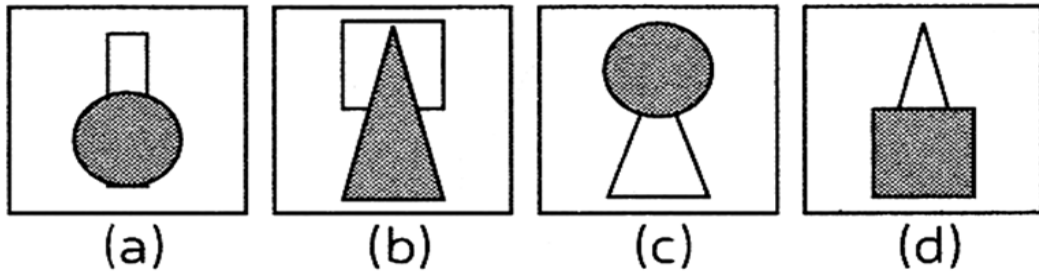
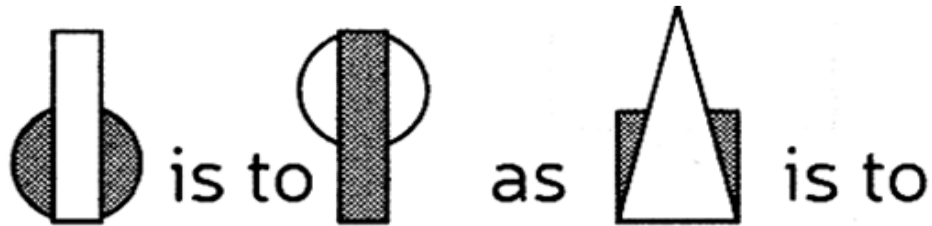


# SECTION - A

1. Find the figure which will complete the second pair in the same way as the first pair.



2. Joy writes the name of parts of body. Choose the one which is different from others.



(a)



(b)



(c)



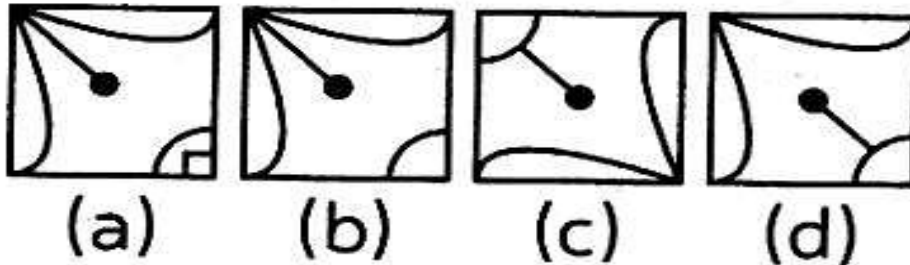

(d)

3. Mukul ranks sixth in a class. Shiva is ninth from the last. If Aurbey is sixth after Mukul and just in the middle of Mukul and Shiva, then how many students are there in the class ?

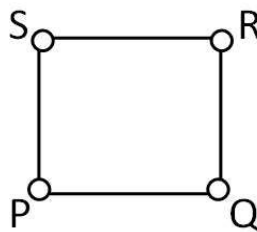
a. 25  
c. 27

b. 26  
d. 28

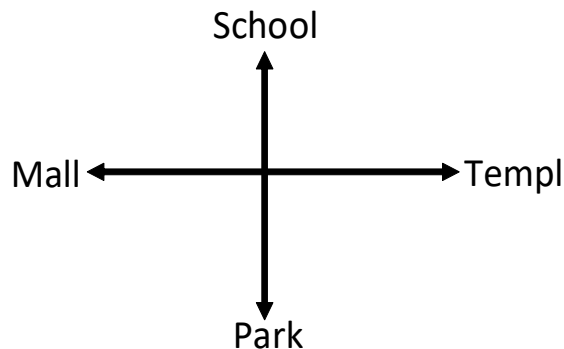
4. Choose the pattern that will complete the larger square.



5. If P exchanges his position with R and S exchanges his position with Q, then the direction of R with respect to Q is



- a. South  
b. West  
c. East  
d. North
6. Study the following diagram carefully and answer the question given below.



If the boy is facing Park and turns  $90^\circ$  in anti-clockwise direction, then which place is he facing now?

- a. Park  
b. Temple  
c. Mall  
d. School



10. What view is shown in this image?



- a. Shake
- b. Grid
- c. Peek
- d. Snap
- e. None of these

11. For which one of the following actions the given icon is clicked in MS Word application.



- a. Circle the selected words
- b. Rotate the selected object
- c. Redo the previous activity
- d. All of these

12. Which of the following computers can be used to send email and internet accessing ?

- a. PDA
- b. Desktop
- c. Laptop
- d. All of these

13. Mohit : If the speed of the CPU is 1 gigahertz, it means, the CPU can process 1 billion instructions in one second.

Rohan : If the speed of the CPU is 1 MHz, it means, the CPU can process 1 billion instructions in one second.

Which one is correct ?

- a. Rohan
- b. Mohit
- c. Both are correct
- d. Both are incorrect

14. Which one of the following contains the utility programs in windows environment?
- a. System tools
  - b. Entertainment
  - c. Administrative tools
  - d. Both (a) and (c)
15. Which one of the following is the anti-virus used to detect the virus and removes it from the coumputer?



d. All of these

## SECTION - C

16. Personal computer is a digital computer. Which one of the following devices is used to give the command to the personal computer?

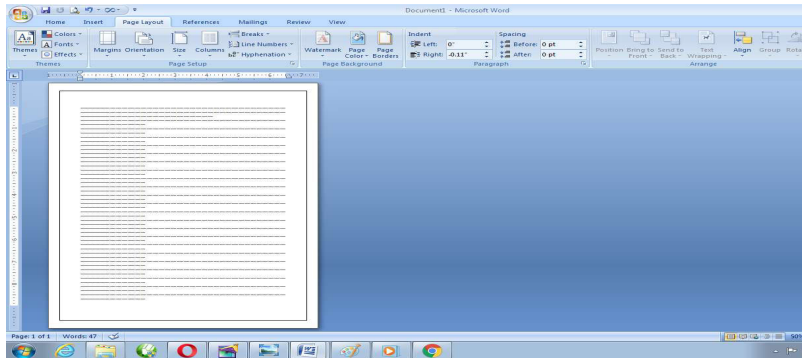


d. Both (a) and (b)

17. Which one of the following is the strikethrough text attribute?

- a. ~~Microsoft word processor~~
- b. **Microsoft word processor**
- c. *Microsoft word processor*
- d. All of these

18. Which one of the following types of page orientation is given in the picture below?



- a. Portrait orientation
- b. Vertical orientation
- c. Landscape orientation
- d. All of these

19. Which one of the following is a type of media through which data is transmitted ?

- a. Fiber optic cable
- b. Computer equipped with wireless adapter
- c. Network cable
- d. All of these



