

# SECTION - A

1. In the following question, a pair of words is given. From amongst the four given alternatives, choose the pair which shows a relationship similar to the one expressed in the given pair.

**Car : Automobile**

- a. Game : Soccer
  - b. Cat : Animal
  - c. Paper : Book
  - d. Vegetable : Potato
2. Choose the odd one out.

Tool	Rule	Cool	Fool
a	b	c	d

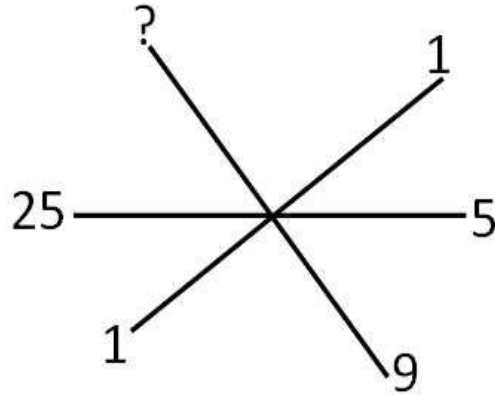
3. If 'water' is called 'food', 'food' is called 'tree', 'tree' is called 'sky', 'sky' is called 'wall', then on which of the following a fruit grows?

- a. Water
- b. Sky
- c. Tree
- d. Food

4. In the following question, arrange the words in a meaningful and logical order and then select the appropriate sequence from the alternatives provided below:

- 1. Puberty
  - 2. Infancy
  - 3. Adulthood
  - 4. Childhood
  - 5. Senescence
- a. 1, 5, 2, 4, 3
  - b. 2, 4, 3, 1, 5
  - c. 5, 4, 3, 2, 1
  - d. 2, 4, 1, 3, 5

5. Which number will replace the question mark?

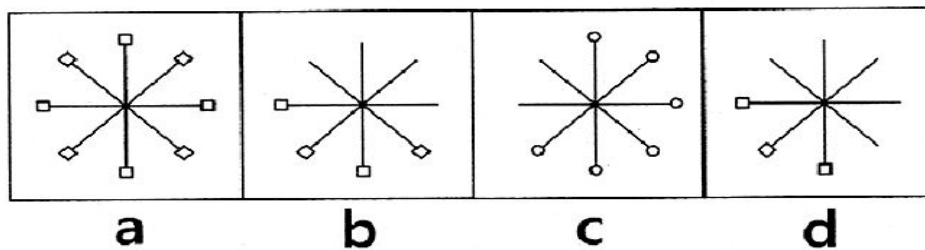
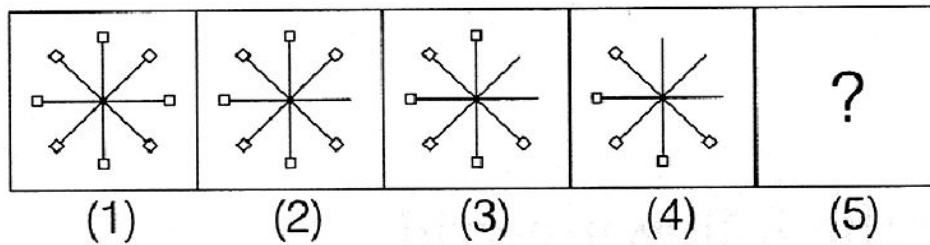


- a. 29
- b. 81
- c. 90
- d. 99

6. A man walked 3 km towards North, then 8 km towards South. His position at the end of the walk is

- a. 5 km towards East
- b. 5 km towards South
- c. 3 km towards South
- d. 8 km towards North

7. Find the next figure in the series given below.



## SECTION - B

8. Read the following statements :

Statement 1. : UNIVAC is an example of first generation computer in which transistors were use instead of vacuum tubes.

Statement 2. : UNIVAC is an example of first generation computer in which vacuum tubes were use.

Which one of the following is correct about the above statements?

- a. Statement 1 is false and 2 is true
- b. Statement 1 is true and 2 is false
- c. Both statements are true
- d. Both statements are false

9. The following are the features of the given picture of a computer. Which one of the following is correct about the name of the given computer?



- 1. It works on machine language.
  - 2. It was the first general purpose electronic computer
  - 3. It has magnetic drum memory.
  - 4. It has enhanced feature than MARK - 1
- a. Mark - II
  - b. ENIAC
  - c. IBM - 130
  - d. Both (a) and (c)

10. Which of the following statement gives correct output while performing addition?

- a. Print (5 + 4)
- b. Print ADD 5,
- c. 4 Print (5 + 4)
- d. All of these

11. Steve is working on a document. He wants to open the Font dialog box to change the font of a text. Which one of the following step Steve perform to open Font dialog box?
- a. Review ---> Paragraph ---> Font
  - b. Page layout ---> Font
  - c. Insert ---> Paragraph ---> Font
  - d. Home tab ---> Font

12. Identify the given picture



- a. Auto sum
- b. Sort filter
- c. Translate
- d. Merge center

13. Identify the given picture.



- a. Preview
- b. Transition to this slide
- c. Animation
- d. Themes

14. Identify the given picture.



- a. Preview
- b. Transition to this slide
- c. Animation
- d. Themes

15. Consider the following statements :
- Statement 1 :** The information from a secondary memory is loaded into primary memory during booting of computer.
- Statement 2 :** The information from a primary memory is loaded into a secondary memory during booting of computer.
- Which one of the following is correct with respect to the above statements?
- Statement 1 is false 2 is true
  - Statement 1 is true 2 is false
  - Both Statements are false
  - Both Statements are true.

## SECTION - C

16. What is the name of the device that is connected at the client end in the CPU tower for networking ?
- Network administrator card
  - Cross connect
  - Network interface cards
  - All of these
17. Read the following Statements :
- Statement 1 :** The shell part of a computer is its command interpreter which plays the role between user and hardware of a computer.
- Statement 2 :** The kernel part of a computer plays the role between user and hardware of a computer.
- Which one of the following is correct with respect to the above Statements ?
- Statement 1 is true 2 is false
  - Statement 1 is false 2 is true
  - Both Statements are false
  - Both Statements are true.

18. Given below the two Statements. Which of the following Statements is/are correct?  
Statements 1 : Using a network, people can communicate efficiently and easily via email, instant messaging, chat rooms, telephone, video telephone call, and video conferencing.  
Statements 2 : In a network environment, each computer on a network may access and use hardware resources on the network, such as printing a document on a shared network printer.
- a. Statement 1 is false 2 is true
  - b. Statement 1 is true 2 is false
  - c. Both Statements are false
  - d. Both Statements are true.

19. Given picture is used for \_\_\_\_\_.



- a. New Slide
  - b. Insert Comment
  - c. New Window
  - d. New Window and New Slide both
20. Identify the given picture.



- a. Insert Chart
- b. Page layout
- c. New slides
- d. Style

21. Jitesh : The speed of a hard disk is slower than speed of RAM/ROM.  
Ashok: The speed of ROM/RAM is slower than speed of hard hard disk.  
Who is correct ?
- |    |                  |    |                    |
|----|------------------|----|--------------------|
| a. | Ashok            | b. | Jitesh             |
| c. | Both are correct | d. | Both are incorrect |
22. Which one of the following types of data storage media is cheaper than the other?
- |    |             |    |              |
|----|-------------|----|--------------|
| a. | Flash drive | b. | Hard disk    |
| c. | RAM         | d. | Compact disk |